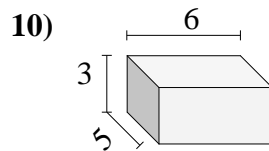
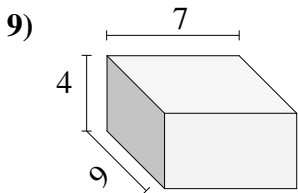
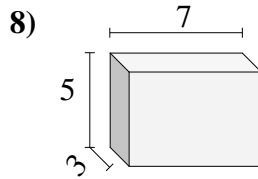
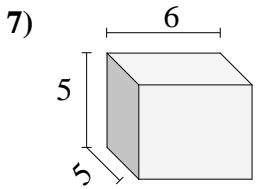
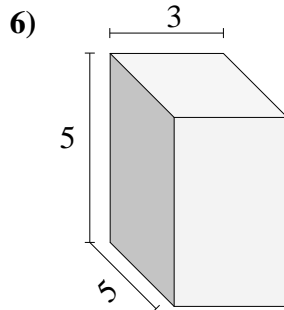
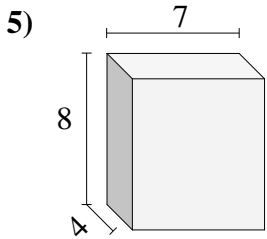
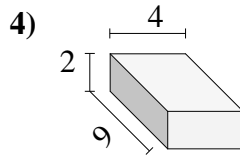
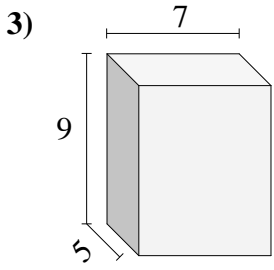
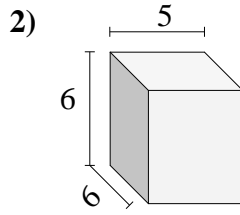
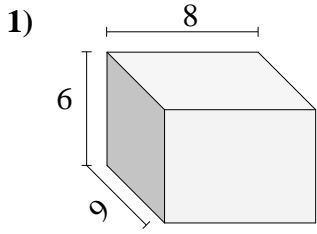




Find the volume of each of the rectangular prisms. Measured in cm (not to scale).

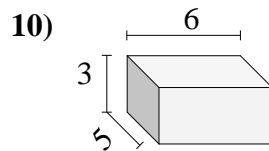
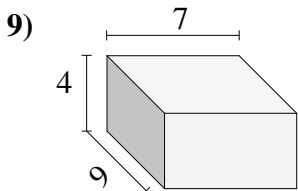
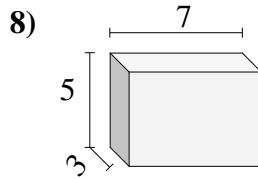
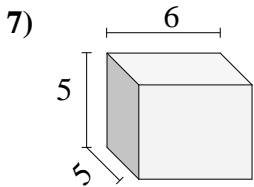
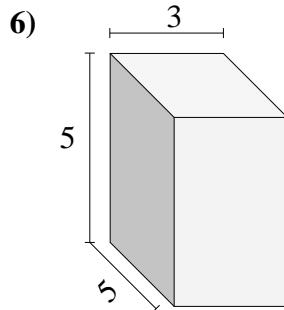
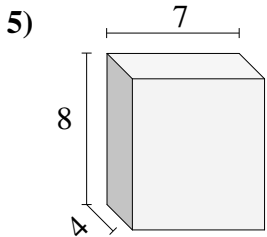
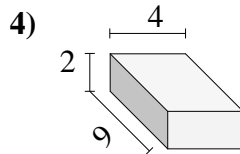
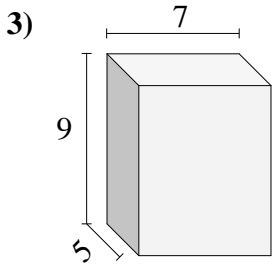
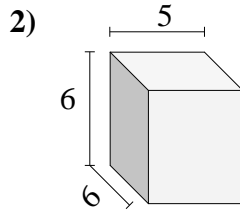
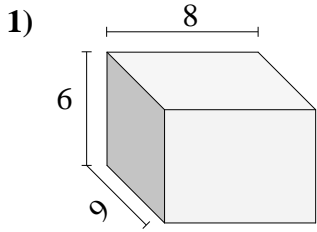


Answers

- 1. _____
- 2. _____
- 3. _____
- 4. _____
- 5. _____
- 6. _____
- 7. _____
- 8. _____
- 9. _____
- 10. _____



Find the volume of each of the rectangular prisms. Measured in cm (not to scale).



Answers

- 1. 432
- 2. 180
- 3. 315
- 4. 72
- 5. 224
- 6. 75
- 7. 150
- 8. 105
- 9. 252
- 10. 90